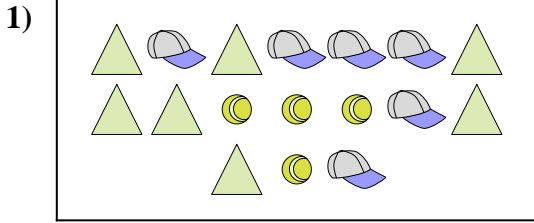


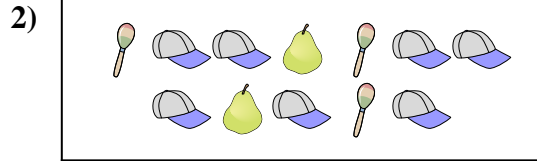


Compare the number of shapes.




Are there more or more ?

- A.
- B.



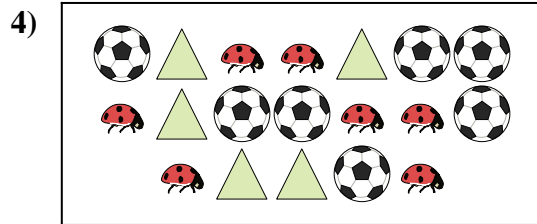
Are there less or less ?

- A.
- B.




Are there less or less ?

- A.
- B.




Are there less or less ?

- A.
- B.



Are there less or less ?

- A.
- B.



Are there less or less ?

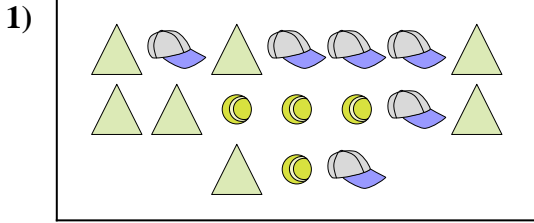
- A.
- B.

**Answers**

- 1. \_\_\_\_\_
- 2. \_\_\_\_\_
- 3. \_\_\_\_\_
- 4. \_\_\_\_\_
- 5. \_\_\_\_\_
- 6. \_\_\_\_\_

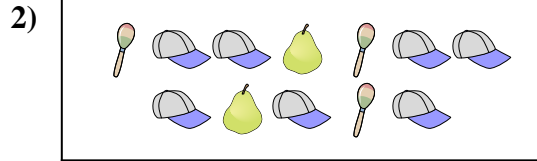


Compare the number of shapes.




Are there more or more ?

- A.
- B.



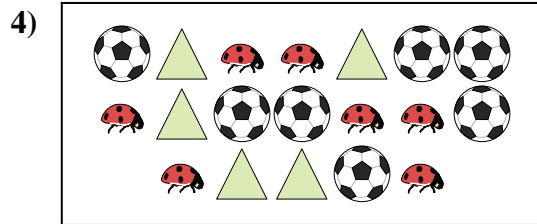
Are there less or less ?

- A.
- B.



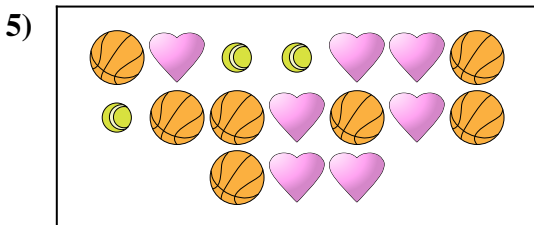
Are there less or less ?

- A.
- B.




Are there less or less ?

- A.
- B.



Are there less or less ?

- A.
- B.



Are there less or less ?

- A.
- B.

**Answers**

- 1.   **A**
- 2.   **A**
- 3.   **A**
- 4.   **A**
- 5.   **A**
- 6.   **A**